

PROCEDURAL

5EP14

First name _____

Last name _____

School _____

Class _____

Date of birth ○○ ○○ ○○○○

Date of test ○○ 05 2014

Total score (maximum 35)



117560

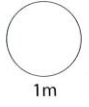
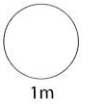


Llywodraeth Cymru
Welsh Government

1

Half of 600 =

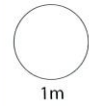
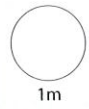
Double 260 =



2

$\frac{1}{2}$ m = cm

$\frac{1}{2}$ cm = mm



3

Circle each number that is in the 4-times table.

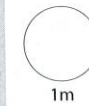
34

16

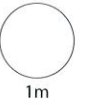
24

36


18



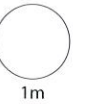
4 Write the number that is 10 less than 1000



5

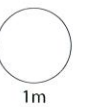


What speed is shown?

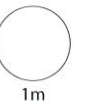
 miles per hour

6

$$375 + 207 = \text{[]}$$



$$509 - 278 = \text{[]}$$

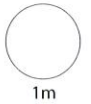


7 Write in order.

1.6 1.46 1.06 1.4

smallest

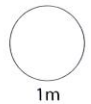
largest



1m

8

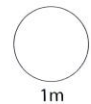
$$725 \div 5 =$$



1m

Write a calculation to check your answer.

\times =



1m

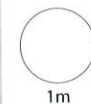
9 Alun took 4 minutes and 15 seconds to run a race.

Cerys took 20 seconds **less** than Alun.

Cerys took

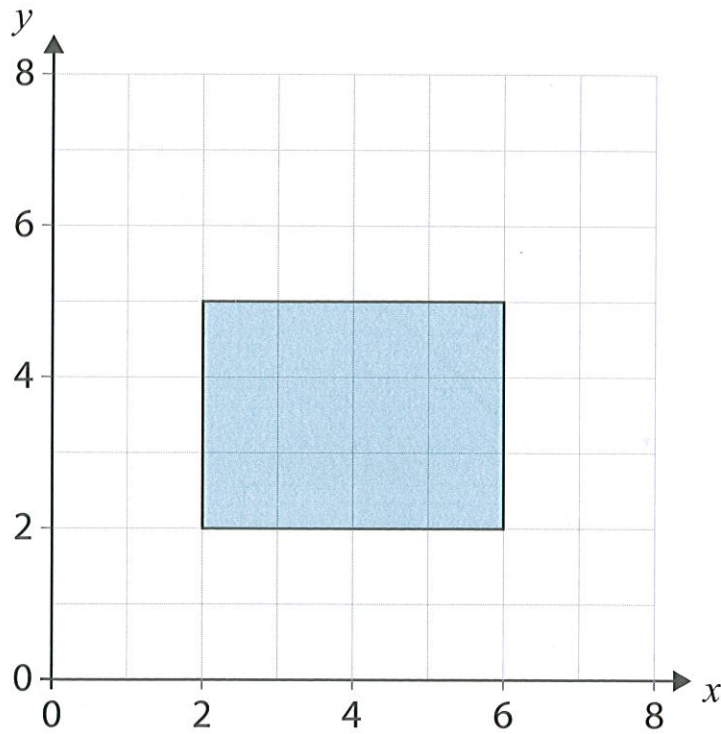
minutes and

seconds.



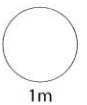
1m

- 10 The shaded rectangle has length 4 cm and height 3 cm.



What is its **area**?

cm²

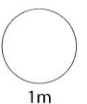


The rectangle has four vertices.

Two are at (2, 2) and (6, 5).

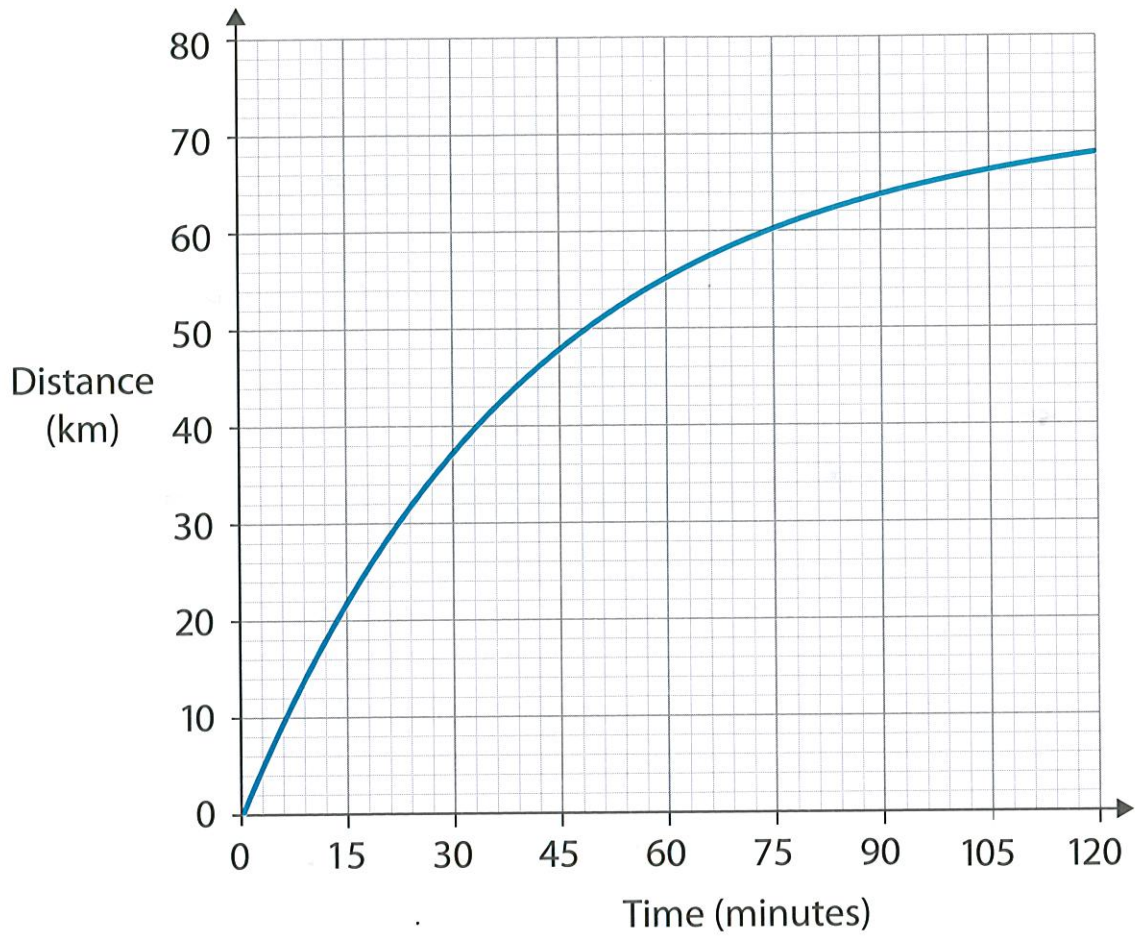
What are the coordinates of the other two vertices?

(,) and (,)



11

Time taken for a car journey

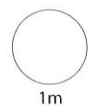
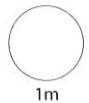


How many minutes did the car take to travel the first 60 km?

minutes

How many km did the car travel in the first hour?

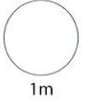
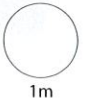
km



12

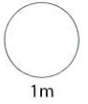
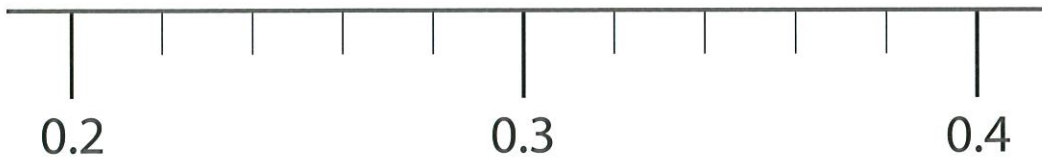
Write $\frac{1}{4}$ as a decimal.

Write 0.3 as a fraction.



13

Draw an arrow (\downarrow) that points to 0.29



14

$\frac{3}{5}$ of £20 = £

Nia has £20

She spends £15

What fraction of the £20 did Nia spend?

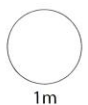
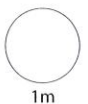
Circle your answer.

$\frac{1}{2}$

$\frac{2}{5}$

$\frac{2}{3}$

$\frac{3}{4}$



TOTAL




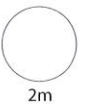
15

Favourite books of pupils in Llan Junior School

	Year 4	Year 5	Year 6
fiction	29	32	27
history	26	28	31
science	30	28	33

More pupils chose **science** than **history**.

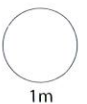
How many more?

2m

16

One tenth of 5000 =



1m

17

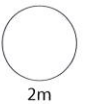


Jon buys 1 drink and 2 cakes.

He pays with a £10 note.

How much change does Jon get?

£



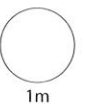
2m

18 There are 144 nails in 1 pack.



How many nails in 3 packs?

nails



1m

TOTAL



6m

19

Play starts

19:40

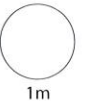
Play finishes

22:10

How long does the play last?

hours and

minutes.



20

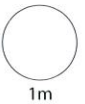
Length of beetles:

Ladybird, 8mm

Goliath, 114mm



Round to the nearest 10mm.



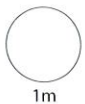
Length of long-horned beetle = 14.6cm



Length of dung beetle = 2.9cm



Difference in length =

 cm

21

$$\boxed{} \times 10 = 23$$


$$410 \div 100 = \boxed{}$$

1m

1m

22 8 bags of crisps for £3.20

How much for 6 bags of crisps?



£

2m