

# REASONING

## 5ER16

First name \_\_\_\_\_

Last name \_\_\_\_\_

School \_\_\_\_\_

Class \_\_\_\_\_

Date of birth ○○ ○○ ○○○○

Date of test ○○ 05 2016

Total score  (maximum 20)



139142



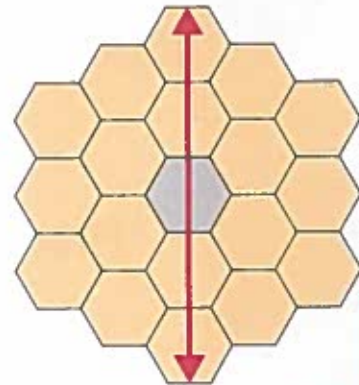
Llywodraeth Cymru  
Welsh Government

1 The diagrams show how tall and how wide the mirrors in the telescope are.




The red arrow shows how **tall** the telescope is.

Work out this height.

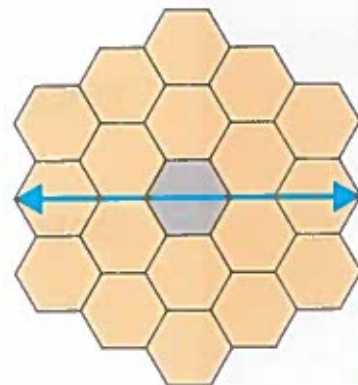


m tall



The blue arrow shows how **wide** the telescope is.

Work out this width.



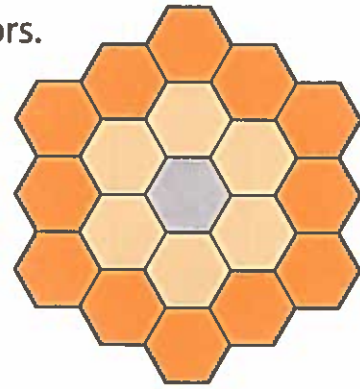
m wide



The telescope has two 'rings' of hexagonal mirrors.

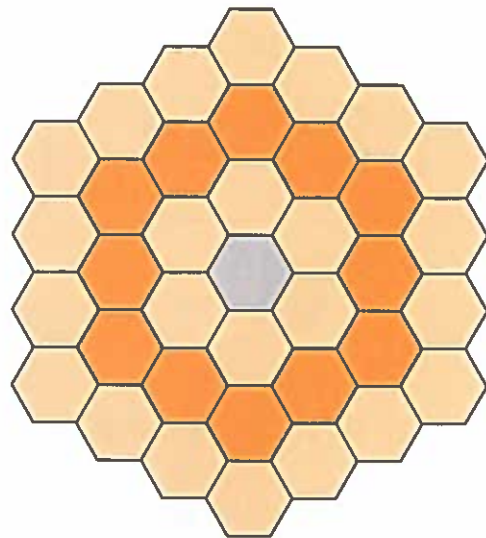
The 1st ring has 6 mirrors.

The 2nd ring has 12 mirrors.



Scientists would like bigger telescopes!

The 3rd ring would have 18 mirrors.



The number pattern continues.

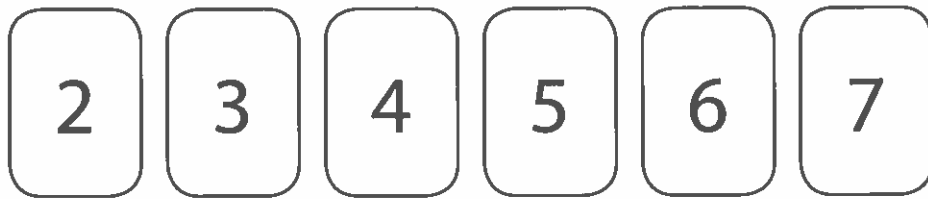
A telescope with 4 rings would have a lot of mirrors!

Altogether, in **all** the rings, how many mirrors would it have?

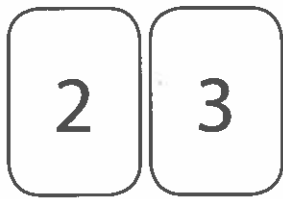


mirrors altogether

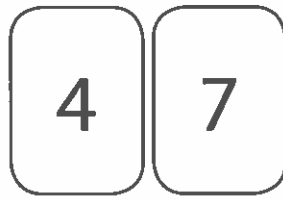
2 Here are six number cards.



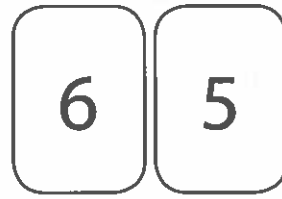
The cards can be put in pairs to make different totals.



Total 5




Total 11



Total 11

Use all six number cards.

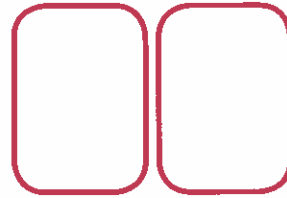
Put them in pairs to make the totals below.



Total 8




Total 9




Total 10

Use all six number cards again.


Show **different** pairs that make the totals.



Total 8






Total 9



Total 10



3 Here are some costs to make potato toys.


 <p>pair of eyes cost 10p</p>	 <p>eyes <b>and</b> hat cost 40p</p>	 <p>eyes <b>and</b> shoes cost 55p</p>
--	---	---

This potato has eyes, hat and shoes.

Work out the cost.

Hint: the answer is **not** 105p.






p

4 Eem lives on planet Sparg.

Ifor lives on planet Earth.



Eem

I am 4 Sparg years old.  
I am 20 spt tall.



Ifor

I am 12 Earth years old.  
I am 140 cm tall.

**1 Sparg year = 2 Earth years**

How old is Eem in Earth years?

Earth years



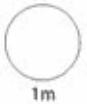
How old is Ifor in Sparg years?

Sparg years




Ifor and Eem are the **same** height, so

**1 spt =**                      **cm**




5 In a classroom there are ...

- 28 pupils 

- 1 chair for each pupil and 1 table for each pair




- a teacher 

- a chair for the teacher and her own table.



The people, the chairs and the tables all have legs.

**Altogether**, how many legs are there?



legs



TOTAL

